

CG Pre B.Ed. 2026

Question Paper

Conducted by CGSSB



General Instructions

- (i) **Duration:** The total duration of the examination is 120 minutes.
- (ii) **Total Marks:** The paper carries a maximum of 100 marks.
- (iii) **Questions:** The paper has 100 questions.
- (iv) **Marking Scheme:** Each question carries 1 mark and there is no negative marking for incorrect answers.

1. Direction - For the below Assertion [As] and Reason [R], choose the correct alternative-
Assertion [As] : Mercury is the farthest planet from the Sun.

Reason [R] : Mercury is the smallest planet in the entire solar system.

- (A) Both [As] and [R] are true, and [R] is the correct explanation of [As].
- (B) Both [As] and [R] are true, but [R] is not the correct explanation of [As].
- (C) [As] is true, but [R] is false.
- (D) [As] is false, but [R] is true.

2. Read the following information carefully and answer the question from the given options:

If 'A + B' means 'A' is the son of 'B', 'A - B' means 'A' is the wife of 'B', 'A × B' means 'A' is the brother of 'B', 'A ÷ B' means 'A' is the mother of 'B' and 'A = B' means 'A' is the sister of 'B'.

What does 'P + R - Q' mean?

- (A) 'Q' is the father of 'P'

- (B) 'Q' is the uncle of 'P'
 - (C) 'Q' is the son of 'P'
 - (D) 'Q' is the brother of 'P'
-

3. If OVER is coded as QYIW and UP as WS, then STAR is coded as:

- (A) UWEV
 - (B) UWDV
 - (C) UVBS
 - (D) UWEW
-

4. Direction - For the below Assertion [As] and Reason [R], choose the correct alternative-Assertion [As] : The Indian Constitution came into force with effect from 26th January 1950.

Reason [R] : 26th January is celebrated as Republic Day.

- (A) Both [As] and [R] are true, and [R] is the correct explanation of [As].
 - (B) Both [As] and [R] are true, but [R] is not the correct explanation of [As].
 - (C) [As] is true, but [R] is false.
 - (D) [As] is false, but [R] is true.
-

5. Some equations have been solved based on a certain system. From the given options, write the answer of the equation that has not been solved-

$$7 - 4 - 1 = 714$$

$$9 - 2 - 3 = 932$$

$$8 - 0 - 4 = ?$$

- (A) 804
 - (B) 840
-

(C) 408

(D) 480

**6. Find the next term in the alpha-numeric series-
Z1A, X2D, V6G, T21J, R88M, P445P, ?**

(A) N2676S

(B) N2676T

(C) T2670N

(D) T2676N

7. In the following sequence find the odd one out-

(A) Eyes

(B) Nose

(C) Eat

(D) Oats

8. Match the following-

Column-I

Column-II

(a) Women, Mothers, Widows (I)




(b) Authors, Teachers, Men (II)



(c) Sparrows, Birds, Mice (III)



(d) Tea, Coffee, Beverages (IV)



Choose the correct answer from the options given below:

- (A) a-IV, b-I, c-II, d-III
- (B) a-I, b-II, c-III, d-IV
- (C) a-IV, b-III, c-II, d-I
- (D) a-I, b-IV, c-III, d-II

9. If all the surfaces of a cube of 15 cm side are coloured black and then cut into smaller cubes of sides 3 cm each, then find how many cubes will have only one surface coloured in black?

- (A) 18
- (B) 24
- (C) 36
- (D) 54

10. Arrange the following in a meaningful order-
Doctor, Fever, Medicine, Medical shop

- (A) Medicine, Doctor, Medical shop, Fever
 - (B) Doctor, Medical shop, Medicine, Fever
 - (C) Fever, Doctor, Medical shop, Medicine
 - (D) Medical shop, Medicine, Fever, Doctor
-

11. Gyan Prakash left for his college in his car -

- (J) He drove 15 km towards the North and then 10 km towards the West.**
- (K) He then turned South and covered 5 km.**
- (L) Further, he turned to the East and moved 8 km.**
- (M) Finally, he turned right and drove 10 km.**

How far and in which direction is he from his starting point?

- (A) 2 km West
 - (B) 5 km East
 - (C) 3 km North
 - (D) 6 km South
-

12. In the series given below how many 8s are there each of which is exactly divisible by its preceding as well as succeeding numbers?

2, 8, 3, 8, 2, 4, 8, 2, 4, 8, 6, 8, 2, 8, 2, 4, 8, 3, 8, 2, 8, 6

- (A) 1
 - (B) 2
 - (C) 3
 - (D) 4
-

13. Six friends are sitting in a circle and playing cards. Ashok is to the left of Dinesh. Raghav is between Sumit and Amit. Ramesh is between Ashok and Sumit. Who is sitting to

the right of Raghav?

- (A) Ashok
 - (B) Amit
 - (C) Dinesh
 - (D) Sumit
-

14. In the following question there is a certain relationship between the given words on one side of :: and one word is given on another side of :: while another word is to be found from the given alternatives having the same relation with this word as in the pair given; find the correct option-

Menu : Food :: Catalogue : ?

- (A) Rack
 - (B) Newspaper
 - (C) Library
 - (D) Books
-

15. A, B, C, D, E, F and G are members of a family consisting of four adults & three children, two of whom F and G are girls.

(J) A and D are brothers and A is a doctor.

(K) E is an engineer married to one of the brothers and has two children.

(L) B is married to D and G is their child.

Who is C?

- (A) A and E's son
- (B) B and D's son
- (C) A and E's daughter
- (D) B and D's daughter

16. If the first and fifth position of the numbers 5, 3, 2, 6, 4, 1, 8, 9 are exchanged and the positions of the second and sixth numbers are also exchanged and so on. Find the sixth number from the right of the rearranged pattern-

- (A) 2
- (B) 4
- (C) 6
- (D) 8

17. It is given that

\times denotes greater than,

ϕ denotes equal to,

$<$ denotes not less than,

\perp denotes not equal to,

Δ denotes less than,

$+$ denotes not greater than.

Choose the correct statement from the following-

If $a \times b \Delta c$ it follows that-

- (A) $a \phi c \Delta b$
- (B) $b < a \times c$
- (C) $a < b + c$
- (D) $c + b < a$

18. Match the following-

Column-I

(a, b as given in Euclidean Algorithm $a = bq + r$)

(a) $a = -112, b = -7$

(b) $a = 118, b = -9$

(c) $a = -109, b = 6$

(d) $a = 115, b = 8$

Column-II

(Values of q and r)

(I) $q = -13, r = 1$

(II) $q = 14, r = 3$

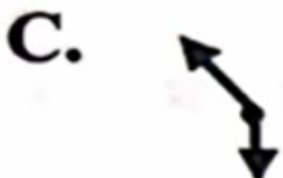
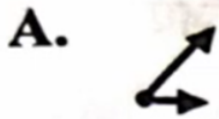
(III) $q = -19, r = 5$

(IV) $q = 16, r = 0$

Choose the correct answer from the options given below:

- (A) a-III, b-I, c-IV, d-II
- (B) a-III, b-II, c-IV, d-I
- (C) a-IV, b-I, c-III, d-II
- (D) a-IV, b-II, c-III, d-I

19. Which is the figure pattern that comes next in the following sequence?



D.



- (A) Fig A
- (B) Fig B
- (C) Fig C
- (D) Fig D

20. Four friends Amrita, Deepa, Smita and Rhea complete their PhD in different number of years.

(K) The one who took maximum time took eight years to complete her PhD, while the one who took the least time took only three years to complete it.

(L) Rhea took more time only than Amrita and completed her PhD in five years.

(M) Smita did not take longer time than Deepa to complete her PhD.

Arrange the names of the friends in order from the minimum to the maximum number of years taken to complete their PhD.

- (A) Amrita → Rhea → Smita → Deepa
- (B) Amrita → Rhea → Deepa → Smita
- (C) Smita → Amrita → Rhea → Deepa
- (D) Smita → Amrita → Deepa → Rhea

21. In this question three words are given which are related in some way. The same relationship obtains among the words in one of the four alternatives given under it, find the correct alternative-

Music : Guitar : Performer

- (A) Dance : Tune : Instrument

- (B) Food : Recipe : Cook
(C) Patient : Medicine : Doctor
(D) Trick : Rope : Acrobat
-

22. What will be the next term in the sequence?

$\frac{17}{14}, \frac{18}{13}, \frac{16}{15}, \frac{19}{12}, ?$

- (A) $\frac{20}{13}$
(B) $\frac{21}{25}$
(C) $\frac{15}{16}$
(D) $\frac{17}{18}$
-

23. Read the information given below and answer the questions that follow-

- (J) If $P + Q$ means; P is the brother of Q.
(K) $P \times Q$ means; P is the father of Q; and
(L) $P - Q$ means; P is the sister of Q.

Then, which of the following represents S is the niece of T?

- (A) $T \times M + S - K$
(B) $K - S \times M + T$
(C) $T + M \times S - K$
(D) $T \times S + M - K$
-

24. Which is the missing number in the given number sequence?

7, 15, 32, —, 138, 281

- (A) 67
(B) 65
-

(C) 69

(D) 63

25. P, Q, R, S, T, V and W are seven friends who left for seven destinations Delhi, Chennai, Hyderabad, Bangalore, Kolkata, Chandigarh and Jaipur, each on a different day of the week-

(K) R left for Jaipur on Monday. On Sunday, one of them left for Bangalore.

(L) T left the next day of P who left for Chandigarh and on the previous day of W.

(M) S left for Kolkata on Friday.

(N) Q did not leave for either Hyderabad or Bangalore and W left for Delhi.

What is the correct sequence of departure of the friends from Monday to Sunday?

(A) $R \rightarrow P \rightarrow T \rightarrow W \rightarrow S \rightarrow Q \rightarrow V$

(B) $R \rightarrow T \rightarrow P \rightarrow W \rightarrow S \rightarrow Q \rightarrow V$

(C) $R \rightarrow W \rightarrow P \rightarrow T \rightarrow S \rightarrow V \rightarrow Q$

(D) $R \rightarrow W \rightarrow T \rightarrow P \rightarrow S \rightarrow V \rightarrow Q$

26. Two statements are given followed by four conclusions J, K, L, M taking statements to be true even if they are at variance from the commonly known facts. Decide which conclusion logically follows from the given statement.

Statement:

Some bottles are drinks.

All drinks are cups.

Conclusions:

(J) Some bottles are cups

(K) Some cups are drinks

(L) All drinks are bottles

(M) All cups are drinks

(A) Only J and K follow.

(B) Only K and L follow.

- (C) Only K and M follow.
(D) Only L and M follow.
-

27. What will be the missing term marked with [?] in the circle?



- (A) 10
(B) 15
(C) 32
(D) 12
-

28. Direction - For the below Assertion [As] and Reason [R], choose the correct alternative-
Assertion [As] : Carbohydrates provide energy to the body.

Reason [R] : Obesity is caused by excessive intake of carbohydrates.

- (A) Both [As] and [R] are true, and [R] is the correct explanation of [As].
(B) Both [As] and [R] are true, but [R] is not the correct explanation of [As].
(C) [As] is true, but [R] is false.
(D) [As] is false, but [R] is true.
-

29. Raipur University presently employs three managers - 'a', 'b' and 'c' and five faculty members - 'd', 'e', 'f', 'g', 'h' and is planning to relocate two managers and three faculty

members to the new centre. Following information was available to the HR department.

(K) Manager 'a' & 'c' cannot be sent as a team to the new centre.

(L) 'c' & 'e' are excellent performers, though they do not share good rapport and hence should not be sent together.

(M) If 'd' is sent, then 'g' cannot be sent, and vice versa.

(N) 'd' & 'f' should not be together in a team.

Which of the following cannot be a possible working unit?

(A) $a \rightarrow b \rightarrow d \rightarrow e \rightarrow h$

(B) $a \rightarrow b \rightarrow f \rightarrow g \rightarrow h$

(C) $a \rightarrow b \rightarrow e \rightarrow g \rightarrow h$

(D) $a \rightarrow b \rightarrow d \rightarrow g \rightarrow h$

**30. Direction - For the below Assertion [As] and Reason [R], choose the correct alternative-
Assertion [As] : Moon cannot be used as a satellite for communication.**

Reason [R] : Moon does not move in the equatorial plane of the earth.

(A) Both [As] and [R] are true, and [R] is the correct explanation of [As].

(B) Both [As] and [R] are true, but [R] is not the correct explanation of [As].

(C) [As] is true, but [R] is false.

(D) [As] is false, but [R] is true.

31. In terms of chemical composition, arrange the elements found in red and yellow soils in descending order of their percentage-

(J) Iron

(K) Magnesium

(L) Insoluble elements

(M) Aluminium

Choose the correct option-

- A. $K \rightarrow L \rightarrow M \rightarrow J$
 - B. $L \rightarrow J \rightarrow M \rightarrow K$
 - C. $J \rightarrow K \rightarrow M \rightarrow L$
 - D. $M \rightarrow J \rightarrow L \rightarrow K$
-

32. Who was the founder of 'Indian Reform Association' in 1870?

- A. Devendranath Tagore
 - B. Ishwar Chandra Vidyasagar
 - C. Keshab Chandra Sen
 - D. Raja Ram Mohan Roy
-

**33. Direction - For the below Assertion [As] and Reason [R], choose the correct alternative-
Assertion [As] : In India, approximately 98% of the total coal production is obtained from the Gondwana coalfields.**

Reason [R] : This coalfield is found extensively distributed across the river valleys of peninsular India.

- A. Both [As] and [R] are true, and [R] is the correct explanation of [As].
 - B. Both [As] and [R] are true, but [R] is not the correct explanation of [As].
 - C. [As] is true, but [R] is false.
 - D. [As] is false, but [R] is true.
-

34. Select the Social Reformers and the institution formed by them during the Renaissance-

- (J) Theosophical society → Swami Vivekananda
- (K) Ramakrishna Mission → Raja Ram Mohan Roy
- (L) Arya Samaj → Swami Dayanand Saraswati
- (M) Aligarh Movement → Sir Syed Ahmad Khan

Choose the correct option-

- A. J and K only
- B. L and M only

- C. J, K and M
 - D. J, K and L
-

35. Who translated the 'Vande Mataram' into English?

- A. Mahatma Gandhi
 - B. B. C. Chatterjee
 - C. Sri Aurobindo Ghosh
 - D. S. C. Bose
-

36. Dolly the sheep, the first mammal cloned created by scientists-

- A. Team Wilmut and Campbell
 - B. Team Campbell and Watson
 - C. Team Watson and Crick
 - D. Team Wilmut and Watson
-

37. At present which of the following are conducted in Chhattisgarh State for primary education?

- (J) FLN – Foundational Literacy and Numeracy
- (K) RTE – Right to Education Act
- (L) OB – Operation Blackboard
- (M) DPEP – District-Primary Education Programme

Choose the correct option-

- A. J and M only
 - B. K and M only
 - C. J and K only
 - D. J, K and L
-

38. Arrange the order of cities that hosted Asian Games in chronological order-

- (K) Jakarta

(L) Doha

(M) Beijing

(N) Seoul

Choose the correct option-

A. $N \rightarrow M \rightarrow L \rightarrow K$

B. $L \rightarrow K \rightarrow M \rightarrow N$

C. $M \rightarrow N \rightarrow L \rightarrow K$

D. $K \rightarrow L \rightarrow M \rightarrow N$

39. Correct sequential steps of Malaria spread-

(K) Infected female Anopheles bites a healthy human.

(L) Parasite invades the liver.

(M) Fever, Shivering and feeling cold.

(N) Parasite invades the red blood cells.

(O) New mosquito gets infected by blood of patient.

Choose the correct option-

A. $K \rightarrow M \rightarrow L \rightarrow N \rightarrow O$

B. $K \rightarrow N \rightarrow M \rightarrow L \rightarrow O$

C. $K \rightarrow L \rightarrow N \rightarrow M \rightarrow O$

D. $K \rightarrow L \rightarrow M \rightarrow N \rightarrow O$

40. The famous slogan 'Do or Die' was given by which movement?

A. Khilafat Movement

B. Non-Cooperation Movement

C. Civil Disobedience Movement

D. Quit India Movement

41. Match the following-

<u>Column-I</u>	<u>Column-II</u>
(Commission)	(Chairman)
(a) Secondary Education Commission	(I) Dr. S. Radhakrishnan
(b) University Education Commission	(II) Dr. A. Lakshmanaswami Mudaliar
(c) Kothari Commission	(III) Dr. M. E. Sadler
(d) Calcutta University Commission	(IV) Daulat Singh Kothari

Choose the correct answer from the options given below-

- A. a-I, b-II, c-III, d-IV
- B. a-II, b-I, c-IV, d-III
- C. a-I, b-II, c-IV, d-III
- D. a-IV, b-I, c-III, d-II

42. Who is called the “Grand Old Man of India”?

- A. Dadabhai Naoroji
- B. Gopal Krishna Gokhale
- C. A. O. Hume
- D. M. G. Ranade

43. Which city will host the 2026 Commonwealth Games?

- A. London
- B. Glasgow
- C. Birmingham
- D. Edinburgh

44. Which Article contains clear directives related to primary education?

“The State shall endeavour to provide within a period of ten years from the commencement of the

Constitution for free and compulsory education for all children till the age of fourteen years.”

- A. Article 41
 - B. Article 42
 - C. Article 46
 - D. Article 45
-

**45. Direction - For the below Assertion [As] and Reason [R], choose the correct alternative-
Assertion [As] : A large share of the Chhattisgarh State Budget is allocated to the social sector.**

Reason [R] : The state government gives priority to welfare schemes.

- A. Both [As] and [R] are true, and [R] is the correct explanation of [As].
 - B. Both [As] and [R] are true, but [R] is not the correct explanation of [As].
 - C. [As] is true, but [R] is false.
 - D. [As] is false, but [R] is true.
-

**46. Direction - For the below Assertion [As] and Reason [R], choose the correct alternative-
Assertion [As] : The National Council for Teacher Education (NCTE) is a statutory body of the Government of India.**

Reason [R] : It was established on 17th August 1995 under the provisions of NCTE Act, 1993.

- A. Both [As] and [R] are true, and [R] is the correct explanation of [As].
 - B. Both [As] and [R] are true, but [R] is not the correct explanation of [As].
 - C. [As] is true, but [R] is false.
 - D. [As] is false, but [R] is true.
-

47. Match the following-

<u>Column-I</u> (Lok Sabha)	<u>Column-II</u> (Speaker)
(a) XI th	(I) Sumitra Mahajan
(b) XIV th	(II) Meera Kumar
(c) XV th	(III) Somnath Chatterjee
(d) XVI th	(IV) P. A. Sangma

Choose the correct answer from the options given below-

- A. a-IV, b-II, c-I, d-III
- B. a-IV, b-III, c-II, d-I
- C. a-III, b-II, c-IV, d-I
- D. a-II, b-I, c-III, d-IV

48. Match the items given in Column-I with the correct pair given in Column-II-

<u>Column-I</u>	<u>Column-II</u>
(a) Economic growth	(I) Increase in GDP
(b) Economic development	(II) Improvement in standard of living
(c) Human capital	(III) Investment in education and health
(d) Poverty	(IV) Lack of minimum consumption
(e) Inequality	(V) Imbalanced income distribution

Choose the correct answer from the options given below-

- A. a-I, b-II, c-III, d-IV, e-V
- B. a-II, b-III, c-IV, d-V, e-I
- C. a-III, b-IV, c-V, d-I, e-II
- D. a-IV, b-V, c-I, d-II, e-III

49. Arrange the following Bharat Ratna recipients in chronological order of receiving the award.

- (K) Sachin Tendulkar
- (L) Amartya Sen
- (M) Lata Mangeshkar

(N) Nanaji Deshmukh

(O) Atal Bihari Vajpayee

Choose the correct option-

A. K → L → M → O → N

B. L → K → M → N → O

C. K → M → O → L → N

D. L → M → K → O → N

50. Who calculates the Gross Domestic Product (GDP) in India?

A. Reserve Bank of India (RBI)

B. Finance Ministry

C. National Statistical Office (NSO)

D. NITI Aayog

51. When a teacher shows positive thinking and supportive behaviour towards children, it reflects which type of attitude?

A. Neutral attitude

B. Inconsistent attitude

C. Negative attitude

D. Positive attitude

52. The term 'kindergarten' means-

A. Children's Garden

B. Children's home

C. Children's school

D. Children's playground

53. On what basis does vocational guidance guide an individual toward a specific vocation?

(J) Capacities

(K) Attitudes

(L) Available opportunities

(M) Personal resources

Choose the correct option-

- A. J and K only
 - B. J, K and L only
 - C. J, K, L and M
 - D. K and M only
-

54. Children are given the opportunity to discover and acquire new knowledge on their own without any special guidance.

- A. Project Method
 - B. Dalton Method
 - C. Heuristic Method
 - D. Play way teaching Method
-

55. Match the following-

<u>Column-I</u>	<u>Column-II</u>
(a) Placement Assessment	(I) Taking a unit test at the end
(b) Formative Assessment	(II) Taking a pre-test before class
(c) Diagnostic Assessment	(III) Asking questions in between the classroom teaching
(d) Summative Assessment	(IV) Identifying issues with a particular skill

Choose the correct answer from the options given below-

- A. a-I, b-III, c-II, d-IV
- B. a-II, b-III, c-IV, d-I
- C. a-III, b-II, c-I, d-IV
- D. a-IV, b-II, c-III, d-I

56. Match the following-

<u>Column-I</u> (Strategy)	<u>Column-II</u> (Purpose)
(a) Tactile	(I) Understanding concepts
(b) Verbal description	(II) Alternative to visual material
(c) Group activities	(III) Peer cooperation
(d) Use of real objects	(IV) Experiential learning

Choose the correct answer from the options given below-

- A. a-I, b-II, c-III, d-IV
- B. a-I, b-III, c-II, d-IV
- C. a-IV, b-II, c-III, d-I
- D. a-II, b-I, c-IV, d-III

57. Which of the following statements about teaching aids are correct?

- (J) They help in retaining concepts for a longer duration.
- (K) They help students learn better.
- (L) They make teaching-learning process interesting.
- (M) They enhance rote learning.

Choose the correct option-

- A. J, K and L only
- B. K, L and M only
- C. J, K and M only
- D. J, K, L and M

58. The process of Developing a Teacher's Positive Attitude Towards Children-

- (K) Developing Trust in Children.

- (L) Gaining Positive Experiences.
- (M) Formation of Values and Beliefs.
- (N) Building Enduring Attitudes.
- (O) Expression in Behavior.

Choose the correct option- A. M → O → L → N → K B. L → N → O → K → M C. K → L → M → N → O D. O → M → N → K → L

59. A teacher's positive attitude towards children helps in developing-

- (J) Self-confidence
- (K) Motivation to learn
- (L) Classroom participation
- (M) Fear

Choose the correct option- A. J, K and L only B. L and M only C. K and L only D. J, K, L and M

60. How should a teacher behave with students? A. General B. Like a Father C. Like a Friend D. Like a Leader

61. Which of the following are essential for successful classroom communication?

- (K) Define the purpose.
- (L) Opt for presentations.
- (M) Use un-risky humour.
- (N) Avoid rehearsals.
- (O) Repeat speech-tags.

Choose the correct option- A. K, M and O B. L, M and N C. M, N and O D. K, L and N

62. Match the following-

<u>Column-I</u>	<u>Column-II</u>
(a) Small size class of 2-3 students	(I) Flip chart or whiteboard
(b) Medium size class of 10-15 students	(II) PowerPoint slides
(c) Large size class of 20-25 students	(III) Presentation with display screen
(d) Extra-large size class of more than 30 students	(IV) Writing on paper

Choose the correct answer from the options given below- A. a-IV, b-I, c-II, d-III B. a-I, b-II, c-III, d-IV C. a-II, b-I, c-III, d-IV D. a-III, b-IV, c-II, d-I

63. Arrange the steps for adapting the teaching-learning process in an inclusive classroom in the correct order-

- (K) Using simple and clear explanations.
- (L) Providing examples from real life situations.
- (M) Using visual aids/flash cards.
- (N) Demonstration and activity participation.

(O) Asking short answer or MCQ questions for assessment.

- A. O → L → N → K → M
 - B. L → N → K → M → O
 - C. M → O → L → N → K
 - D. K → L → M → N → O
-

64. What is the main purpose of vocational information?

- A. To prepare students only for examinations
 - B. To provide information about different occupations
 - C. To promote sports activities
 - D. To provide financial assistance
-

65. Classroom interaction is called:

- A. Beating or punishing by making them stand or sit in a painful posture.
 - B. Children learn by doing their own gathering evidence.
 - C. To improve the teaching and learning processes and materials.
 - D. Learning through work and interaction with teachers and classmates in the classroom.
-

66. The major objective of education is-

- A. Reforming the society.
 - B. Making students disciplined.
 - C. Developing inherent abilities/powers of students.
 - D. Making students followers of teachers.
-

67. Select the alternative which consists of positive factors contributing to the effectiveness of teaching:

- (J) Teacher's knowledge of the subject.
- (K) Teacher's socio-economic background.
- (L) Communication skill of the teacher.
- (M) Teacher's competence in managing the classroom transactions.

- A. J and K only
 - B. J, K and M
 - C. K, L and M
 - D. J, L and M
-

68. Match the following-

<u>Column-I</u>	<u>Column-II</u>
(a) Cognitive component	(I) Thoughts or beliefs about an object
(b) Affective component	(II) Feelings or emotions
(c) Behavioural component	(III) Tendency to act in a particular way
(d) Social influence	(IV) Attitude formed due to influence of others

- A. a-I, b-II, c-III, d-IV
 - B. a-I, b-III, c-II, d-IV
 - C. a-IV, b-II, c-III, d-I
 - D. a-II, b-I, c-IV, d-III
-

69. The main aim of education is to develop a person's-

- A. Knowledge
 - B. Body
 - C. Personality
 - D. Intelligence
-

70. Direction - For the below Assertion [As] and Reason [R], choose the correct alternative-

Assertion [As] : A teacher's positive attitude toward children improves the classroom learning environment. Reason [R] : Attitude influences a person's behaviour and responses.

- A. Both [As] and [R] are true, and [R] is the correct explanation of [As].
 - B. Both [As] and [R] are true, but [R] is not the correct explanation of [As].
 - C. [As] is true, but [R] is false.
 - D. [As] is false, but [R] is true.
-

71. What does adaptation mean in inclusive education?

- A. Changing only the textbook
 - B. Teaching only in special schools
 - C. Modifying assessment, materials, curriculum, or classroom environment
 - D. Seating students separately in the classroom
-

72. If a teacher has prejudice towards children, what is the likely outcome?

- A. Children's confidence will increase.
 - B. Learning speed will increase.
 - C. Children's development will be negatively affected.
 - D. Classroom discipline will improve.
-

73. What qualities should a teacher have to be a good facilitator?

(J) Ability to create activities (K) Discriminatory behavior towards the child (L) Recognizing a child's mental ability (M) Adequate knowledge of subject matter

- A. J and L only
 - B. K and L only
 - C. J, L and M
 - D. J, K and L
-

74. The most important challenge before a teacher is-

- A. To maintain discipline in the classroom.
- B. To make students do their homework.

- C. To prepare question papers.
 - D. To make teaching-learning process enjoyable.
-

75. Which of the following is an example of a Cognitive Skill?

- A. Emotional control
 - B. Problem-solving ability
 - C. Time management
 - D. Physical health
-

76. Arrange the steps of the process of developing an interest in business in the correct order-

(K) Self-awareness of interests and abilities. (L) Exploration of career opportunities. (M) Matching skills with careers. (N) Planning for education/training. (O) Career decision making.

- A. O → L → N → K → M
 - B. L → N → K → M → O
 - C. M → O → L → N → K
 - D. K → L → M → N → O
-

77. SWAYAM is initiated by Govt. of India with an objective to-

(K) Ensure best quality content produced and delivered. (L) Provide quality materials with nominal cost. (M) Assess students continuously and grant degrees. (N) Teach all classes from class IX to PG. (O) Accessed by anyone, anywhere at any time.

- A. K, N and O
 - B. K, L and O
 - C. K, M and N
 - D. M, N and O
-

78. Vocational interest mainly develops during which stage?

- A. Childhood
 - B. Adolescence
 - C. Old age
 - D. Infancy
-

79. Why is adaptation necessary in inclusive classrooms?

(J) To consider different learning styles. (K) To ensure participation of all students. (L) To provide equal learning opportunities. (M) To improve only examination results.

- A. J and K only
- B. J, L and M
- C. K and M only
- D. J, K and L

80. Which of the following should a teacher focus on in the classroom?

(K) One-way communication. (L) Intercultural harmony. (M) Feedback from students. (N) Creating a flexible atmosphere. (O) Avoiding giving advice.

- A. K, L and M
- B. L, M and N
- C. K, N and O
- D. M, N and O

81. कारक विश्लेषण तालिका के अनुसार निम्नलिखित कारकों को उनके सही व्याकरणिक क्रम में व्यवस्थित करें:

- (K) अधिकरण
- (L) करण
- (M) संप्रदान
- (N) अपादान
- (O) संबंध

- (A) $L \rightarrow O \rightarrow M \rightarrow N \rightarrow K$
- (B) $L \rightarrow M \rightarrow N \rightarrow O \rightarrow K$
- (C) $L \rightarrow O \rightarrow N \rightarrow M \rightarrow K$
- (D) $L \rightarrow N \rightarrow O \rightarrow M \rightarrow K$

82. प्रयोग के आधार पर एवं अर्थ की दृष्टि से सर्वनाम (Pronoun) के कितने भेद होते हैं?

- (A) छह
 - (B) पाँच
 - (C) सात
 - (D) आठ
-

83. प्लुत स्वर के संबंध में सही कथन चुनिए:

- (J) इसका कोई चिह्न नहीं होता।
 - (K) हिन्दी में सामान्यतः इसका प्रयोग नहीं होता।
 - (L) वैदिक भाषा में इसका प्रयोग अधिक हुआ है।
 - (M) इसे 'एकमात्रिक' स्वर भी कहते हैं।
- (A) J और K
 - (B) J और L
 - (C) J, K और M
 - (D) J, K और L
-

84. 'घोड़ा' शब्द के लिए सही तत्सम शब्द चुनिए:

- (A) अश्व
 - (B) घोटक
 - (C) बाजि
 - (D) सैंधव
-

85. सुमेल कीजिए:

- (a) प्रत्येक (I) तत्पुरुष
(b) हथकड़ी (II) द्वंद्व
(c) मुनिवर (III) अव्ययीभाव
(d) हरिहर (IV) कर्मधारय
- (A) a-I, b-II, c-III, d-IV
(B) a-III, b-II, c-I, d-IV
(C) a-III, b-I, c-IV, d-II
(D) a-IV, b-III, c-II, d-I
-

86. Assertion Reason question:

Assertion (As): द्विगुण व्यंजन शब्द की शुरुआत में नहीं आते।

Reason (R): ये केवल शब्द के मध्य या अंत में प्रयुक्त होते हैं।

- (A) दोनों सही और R सही व्याख्या है
(B) दोनों सही लेकिन R व्याख्या नहीं है
(C) केवल As सही
(D) केवल R सही
-

87. निम्नलिखित में से कौन-सा शब्द 'अनु' उपसर्ग से नहीं बना है?

- (A) अन्वेषण
(B) अनुपम
(C) अनुचर
(D) अनुराग
-

88. लोकोक्ति अर्थ चुनें

- (A) शर्म
(B) उपाय नहीं
-

- (C) फैशन
(D) बनावटी बड़प्पन
-

89. 'चिन्मय' में संधि कौन-सी है?

- (A) स्वर संधि
(B) व्यंजन संधि
(C) विसर्ग संधि
(D) कोई नहीं
-

90. 'जलज' शब्द के लिए सही अनेकार्थी शब्द समूह चुनिए

- (A) J और K
(B) J और L
(C) J, K और M
(D) J, K और L
-

91. Direction - For the below Assertion [As] and Reason [R], choose the correct alternative-
Assertion [As] : It was not possible to "linger on the expedition".

Reason [R] : Once the tide turned, it came in rapidly and could cut off the return path.

- (A) Both [As] and [R] are true, and [R] is the correct explanation of [As].
(B) Both [As] and [R] are true, but [R] is not the correct explanation of [As].
(C) [As] is true, but [R] is false.
(D) [As] is false, but [R] is true.
-

92. Choose the correct answer from the options given below the sentence:

When the principal entered the class, a student _____ on the blackboard.

- (A) wrote
(B) was writing
-

- (C) writes
 - (D) is writing
-

93. Fill in the blanks with suitable preposition:

"The dog is lying _____ the floor."

- (A) at
 - (B) above
 - (C) on
 - (D) upon
-

94. Choose the correct answer from the options given below the sentence:

He always _____ to prove that the earth revolves around the sun.

- (A) tried
 - (B) tries
 - (C) was trying
 - (D) is trying
-

95. Below is given sentence in active/passive voice. Out of the four alternative suggested, select one which best expresses the same sentence in passive/active voice:

"The waiter filled the glasses with water."

- (A) The glasses filled with water by the waiter.
 - (B) The glasses were filled with water by the waiter.
 - (C) The waiter was filled the glasses with water.
 - (D) The water were filled in the glasses by waiter.
-

96. Change the following sentence from the active voice to the passive voice-

"The peon opened the gate."

- (A) The gate is opened by the peon.
 - (B) The gate were opened by the peon.
 - (C) The gate has opened by the peon.
 - (D) The gate was opened by the peon.
-

97. Choose the prefix for the word 'Possible' to make it opposite:

- (A) Un
 - (B) Im
 - (C) Ill
 - (D) In
-

98. Below is given sentence in active/passive voice. Out of the four alternative suggested, select one which best expresses the same sentence in passive/active voice:

”The waiter filled the glasses with water.”

- (A) The glasses filled with water by the waiter.
 - (B) The glasses were filled with water by the waiter.
 - (C) The waiter was filled the glasses with water.
 - (D) The water were filled in the glasses by waiter.
-

99. Arrange the following major ideas from the passage in the most logical order for writing a coherent précis:

- (K) Disarmament assumes overriding importance despite continued arms competition.
 - (L) The nuclear age presents humanity with only two alternatives: annihilation or peaceful co-existence.
 - (M) Achieving peace requires cultivating tolerance and reshaping policies.
 - (N) Immediate and serious action is necessary as delay is dangerous.
 - (O) The United Nations bears the primary responsibility for ensuring progress toward disarmament.
- (A) L → K → M → N → O
 - (B) K → L → M → N → O
 - (C) K → M → L → N → O
 - (D) L → K → M → O → N
-

100. Choose the correct complex sentence from the options given below:

”My brother gave me a watch and I have lost it.”

- (A) I have lost the watch which my brother gave me.
 - (B) My brother gave me a watch, but I have lost it.
 - (C) Since my brother gave me a watch, I lost it.
 - (D) I lost the watch that was given to me by my brother.
-